

CANADIAN FORCES APTITUDE TEST PRACTICE VERSION

INTRODUCTION

Every applicant to the Canadian Forces must complete the Canadian Forces Aptitude Test (CFAT). This test is very important as it gives your military career counselor an indication of what occupations you may be best suited for. In order to help prepare you for taking the CFAT, we have prepared this practice test. The questions in the actual CFAT will look like those in this practice test but there will be more of them that you will be asked to complete in a limited time.

WHAT TO DO PRIOR TO TAKING THIS TEST.

You should find a quiet place - free from any noise or interruption - and work through the test by yourself.

Read all the instructions carefully before you attempt each test. Work through each practice test as quickly and accurately as you can without omitting any questions.

This test is designed to be self-administered. You should time yourself when you do this test. As a guide, you should not take longer than 5 minutes for test 1, 4 minutes for test 2 and 10 minutes for test 3.

Mark your answers on the enclosed answer sheet. Once you are finished all three tests, you can compare your answers to the answer key on the final page.

Good Luck!

**THIS TEST WAS PRODUCED BY THE DIRECTOR MILITARY PERSONNEL
OPERATIONAL RESEARCH AND ANALYSIS, OTTAWA, ONTARIO**

(DMPORA AUG 2007)

"THIS PUBLICATION IS UNCLASSIFIED AND MAY BE DISTRIBUTED TO THE PUBLIC."

Practice Test 1 (5 minutes)

1. MANY is to FEW as HOT is to
- (A) time (B) clothes (C) cold (D) magic

2. CONVOY means the same as
- (A) carry (B) flock (C) standard (D) escort

3. VICTORY is the opposite of
- (A) success (B) defeat (C) glory (D) cowardice

4. SPECULATE means the same as
- (A) squander (B) think (C) mirror (D) diminish

5. INCITE means the same as
- (A) short (B) delay (C) place (D) provoke

"THIS PUBLICATION IS UNCLASSIFIED AND MAY BE DISTRIBUTED TO THE PUBLIC."

UNCLASSIFIED

PRACTICE TEST 3

PROBLEM SOLVING (PS)

Directions

This is a test of your ability to solve problems. For each problem in the test there are four possible answers: A, B, C, or D. There is one correct answer for each problem. Read each problem carefully and decide which one of the four answers is the best one. You are to mark your answer on the answer sheet by blacking out the letter, which corresponds to your choice. Note: calculators are not allowed in the actual test.

If you need to do any figuring for any problem in this test, you may use scratch paper.

Now look at Practice Exercise E1 below.

- E1. A boy buys a toy for \$20, a book for \$10, and a compact disc for \$15.
How much does he pay for all?

(A) \$30 (B) \$35 (C) \$45 (D) \$50

ANSWER: ●





- E2. Which number comes next in the following series? 2, 4, 6, 8, 10, 12, ...

(A) 9 (B) 10 (C) 13 (D) 14

ANSWER: ●

- E3.

F is to T as P is to

(A)  (B)  (C)  (D) 

ANSWER: ●

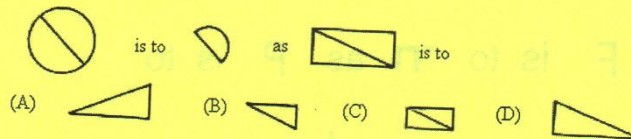
UNCLASSIFIED

UNCLASSIFIED

PRACTICE TEST 3 (10 minutes)

1. In the word "ECCLESIASTES" how many E's are there with an S next to them?
(A) 0 (B) 1 (C) 2 (D) 3
2. If a child can run 10 meters while a car travels 30 meters, how many meters can the child run while the car travels 66 meters?
(A) 12 (B) 15 (C) 22 (D) 25
3. A team of clothing workers had an output of 1,000 uniforms per week. This output was increased by 20%, which demanded an increase of 50 uniforms per worker. How many workers are there on the team?
(A) 4 (B) 15 (C) 20 (D) 24
4. If in the army there is one officer for every 16 privates, how many officers are there in a regiment consisting of 1,105 officers and privates?
(A) 62 (B) 65 (C) 67 (D) 69

5.



UNCLASSIFIED

6. It was 3:10 by Smith's watch when he left home to go to the post office. While at the post office he corrected his watch by setting it forward from 3:35 to 3:44. It was 4:04 by his watch when he returned home. How many minutes was he away?

- (A) 45 (B) 55 (C) 63 (D) 85

7. Which number comes next in the following series? 9, 12, 15, 18, 21, ...

- (A) 18 (B) 23 (C) 24 (D) 25

8. $\frac{1}{2}$ divided by 0.05 =

- (A) 0.0005 (B) 1 (C) 10 (D) 100

9. A pie is cut so that one piece, which is one quarter of the pie, is twice as large as each of the other pieces. Into how many pieces is the pie cut?

- (A) 3 (B) 4 (C) 7 (D) 8

10. How many soldiers are there in a group of 27 sailors and soldiers if there are four fifths as many sailors as soldiers?

- (A) 6 (B) 15 (C) 21 (D) 22